

CLASS I MATHS

REVISION SHEET

NAME: _____

Date: _____

Q1. Write the ordinal numbers:

a) 7th - _____

e) 9th - _____

b) 6th - _____

f) 4th - _____

c) 1st - _____

g) 3rd - _____

d) 5th - _____

h) 8th - _____








Q2. Fill in the blanks:

1. The face of the clock is called its _____.

2. The shorter hand is called the _____.

3 The longer hand is called the _____.

Q3. Tell the time:



Q4. Write in descending order:

a) 97, 77, 67, 27, 87 → _____, _____, _____, _____, _____

b) 25, 11, 90, 44, 19 → _____, _____, _____, _____, _____

c) 32, 12, 72, 52, 24 → _____, _____, _____, _____, _____

d) 40, 90, 80, 70, 50 → _____, _____, _____, _____, _____

e) 15, 38, 69, 73, 23 → _____, _____, _____, _____, _____

f) 10, 45, 81, 71, 11 → _____, _____, _____, _____, _____

g) 68, 86, 66, 7, 22 → _____, _____, _____, _____, _____

Q5. Write the number names:

a) 99 = _____

b) 63 = _____

c) 87 = _____

d) 91 = _____

e) 72 = _____

f) 86 = _____

g) 74 = _____

